

UNIFIED MOCK EXAMINATION

ENGLISH STUDIES/VERBAL APTITUDE/GENERAL PAPER

(TIME: 2 Hours)

Instructions: Do not open this question booklet until you are told to do so. While you are waiting read the following instructions carefully:

- (i) Attempt all questions. Each question is followed by four options lettered A - E
- (ii) Find out the correct option and shade your answer with your pencil in your OMR sheet.
- (iii) Do not spend too much time on a question. If you find a question difficult, leave it and try again later.

ENGLISH STUDIES

SECTION A : LEXIS

Choose from the options lettered A-E the one that is *nearest in meaning* to the underlined word (Nos. 1 - 5)

- Ade lives with his parents in the rural area (a) city
(b) metropolis (c) region (d) town (e) village
- The boy's motive for killing the goat is wrong
(a) desire (b) excuse (c) interest (d) reason (e) action
- I am anxious to see my result (a) afraid (b) eager
(c) glad (c) hopeful (c) willing
- The government has decided to make History a mandatory subject at all levels of education (a) compulsory (b) major
(c) minor (d) preferred (e) voluntary
- Balkis was legally married to Sule. (a) accidentally
(b) forcefully (c) happily (d) lawfully (e) reluctantly

SECTION B

Instructions; Choose from the list of words or group of words lettered A-D, the one which is the nearest in meaning to the word underlined.

- The student was lucky to have passed the examination
(a) Glad (b) Fortunate (c) Happy (d) Chanced
- The pupils were pleased when their teachers released the result of their test. (a) Consoled (b) Confused (c) Exited (d) Sad
- The strange man peeped through the window
(a) Looked (b) Cried (c) Shouted (d) Talked
- Promotion Examination is done yearly (a) Anytime
(b) Annually (c) Frequently (d) Decade
- Rice and dodo is Balogun's best food (a) Favourite
(b) Interesting (c) Tasteless (d) Worst

SECTION C

Choose from the options lettered A-E the one that is *most nearly opposite in meaning* to the underlined word/expression (Nos. 11 - 15).

- Tolu pleaded with her friend to accompany her to the party.
(a) commanded (b) compelled (c) convinced (d) induced (e) persuaded

- The headboy was rewarded for his punctuality (a) dishonesty
(b) indolence (c) lateness (d) pride (e) rudeness
- The investigating officer concealed his identity (a) changed
(b) disclosed (c) falsified (d) hid (e) recognized
- The patient's condition worsens by the day (a) declines
(b) decreases (c) dwindles (d) improves (e) increases
- The street was deserted after the robbery incident (a) abandoned
(b) crowded (c) empty (d) occupied (e) vacant

SECTION D : STRUCTURE

Complete each of the following statements with the *most appropriate* of the options lettered A-E (Nos. 16 - 35)

- Femi is the _____ of the two boys (a) more shorter
(b) short (c) shorter (d) shortest (e) very short
- The boy wanted to know _____ his brother did the work
(a) and (b) as (c) how (d) which (e) while
- The pupils can write well, _____ they? (a) can
(b) can't (c) could (d) couldn't (e) should
- He woke up very early _____ still missed the first bus (a) and
(b) but (c) even (d) though (e) yet
- My dog was _____ to Lagos by my uncle (a) been taken
(b) being taken (c) taken (d) taking (e) took
- That is the man _____ killed the snake (a) which
(b) who (c) who's (d) whom (e) whose
- The dog ran _____ the road (a) across (b) beside
(c) between (d) over (e) through
- He _____ volleyball every Saturday. (a) play (b) played
(c) is playing (d) plays (e) has played
- It _____ raining all day (a) had been (b) had being
(c) has been (d) have been (e) have being
- I received a present _____ Juliet (a) about
(b) by (c) from (d) of (e) over
- By the time she got home, her baby _____ slept for about three hours
(a) had (b) has (c) have (d) will have (e) would have
- Sharon _____ to school twice a week (a) always walk
(b) is walking (c) walk (d) walked (e) walks

28. My cousin _____ some apples from the supermarket yesterday.
(a) bought (b) buy (c) buys (d) will buy (e) would have bought
29. The boy fell and injured _____ (a) himself (b) hisself
(c) itself (d) oneself (e) yourself
30. Active Voice: Her father loves her
Passive Voice: She _____ loved by her father
(a) will be (b) is (c) was (d) should be (e) has been
31. Throw the _____ in the waste bin (a) gabage
(b) gabbage (c) garbage (d) garbigie (e) gerbage
32. Yusuf's brother is a (a) hyphocrate (b) hyphorcrete
(c) hypocrate (d) hypocrate (e) hyporcrate
33. You can do it, _____ you? (a) aren't (b) can
(c) can't (d) should (e) won't
34. Olu worked hard _____ failed the examination (a) and
(b) but (c) hence (d) then (e) though
35. My mother flogged _____ because I went home late
(a) he (b) her (c) him (d) I (e) me

SECTION E

Instructions; Choose which one of the four endings is needed to complete each of the following

36. Kola tries his best (a) Playing matches (b) To solve the problems
(c) Slapping his peers (d) at looking over the work
37. Being an intelligent girl (a) She is sure to pass the examination
(b) She won't bother (c) She is too rascal (d) She may fail
38. The dog bark (a) Often and Often (b) When it sees a thief or a
stranger (c) When the door is locked (d) Before sleeping
39. It is good to (a) Be honest (b) Play all
(c) Round the clock (d) Be a wicked
40. This table is too high (a) to my small brother (b) Than the one
in the office (c) for me to use (d) For putting books on.

SECTION F

Instructions; Choose one correct word from A - D; describing the statements below -:

41. A person who repair motor vehicles (a) Engineer
(b) Electrician (c) Mechanic (d) Driver
42. Two babies born at the same time (a) Big babies
(b) Small babies (c) Twins (d) Children

43. A period of one Hundred years (a) Century
(b) Decade (c) Bi-annual (d) Annual
44. A man who kill and sell meat (a) Mallam
(b) Butcher (c) Meat seller (d) Shop man
45. People watching a football match (a) Supporters
(b) Spectators (c) Referees (d) Crowd

SECTION G

Instructions; Choose from the given alternative the correct spelling

46. (a) Immediately (b) Imediately (c) Immediatly (d) Emmediately
47. (a) Insetizide (b) Insecticide (c) Inseticide (d) Insetticide
48. (a) Abestors (b) Asbestos (c) Abbestors (d) Asbestor
49. (a) Assessment (b) Assesment (c) Aseesment (d) Hassesment
50. (a) Comotion (b) Commotion (c) Comosion (d) Komotion

PART B

SECTION A

VERBAL APTITUDE

Answer all the questions

Instructions; From the code of a word, you are to form another word. Look carefully and choose the correct answer from the options lettered A - D

1. If "Tractor" is 6521635, "actor" is (a) 16356
(b) 21635 (c) 61235 (d) 21563
2. If "Items" is 21748, "sim" is (a) 824 (b) 814 (c) 784 (d) 821
3. If "Education" is 326145893, "action" is (a) 265891
(b) 426158 (c) 415893 (d) 415793
4. If "Central" is 2136574, "lent" is (a) 4136 (b) 4213 (c) 4163 (d) 4316
5. If "Anger" is 64139, "gear" is (a) 1493 (b) 1364 (c) 1346 (d) 1369

SECTION B

Instructions; Choose the correct letter from the options A-D, that can end the first and begins the second word.

6. Tracto () odent (a) r (b) t (c) s (d) m
7. Giraff () lephant (a) l (b) e (c) a (d) o
8. Guav () nnual (a) z (b) u (c) a (d) l
9. Petro () awyer (a) l (b) s (c) d (d) f
10. Humbl () legant (a) y (b) e (c) u (d) t

SECTION C

Instructions; Arrange the following word in alphabetical order

- | 1 | 2 | 3 | 4 |
|-------------|-------------|-------------|-------------|
| 11. Broad | Brand | Bread | Bead |
| (a) 4,3,2,1 | (b) 4,3,1,2 | (c) 4,2,1,3 | (d) 4,2,3,1 |
| 12. Common | Combine | Contact | Control |
| (a) 2,1,3,4 | (b) 2,3,1,4 | (c) 2,4,1,3 | (d) 3,1,2,4 |
| 13. Seat | Seed | Seize | Seal |
| (a) 4,1,2,3 | (b) 4,1,3,2 | (c) 4,2,1,3 | (d) 4,3,2,1 |
| 14. Mode | Mean | Meat | Mend |
| (a) 2,3,4,1 | (b) 2,3,1,4 | (c) 3,2,1,4 | (d) 2,4,1,3 |
| 15. Trace | Treat | Trait | Trail |
| (a) 1,4,3,2 | (b) 1,3,2,4 | (c) 4,1,3,2 | (d) 1,4,2,3 |

SECTION D

Instructions: Choose from the alternatives lettered A-D, the words that best complete the relationship in the following sentences.

Example Shoe Foot, Glove Finger

- | | |
|---|---------------|
| 16. Artist Drawing, Bricklayer..... | (a) Dancing |
| (b) Building (c) Welding | (d) Mixing |
| 17. Paper Printing, Pen | (a) Playing |
| (b) Jotting (c) Writing | (d) Painting |
| 18. Cement Moulding, Flour | (a) Baking |
| (b) Painting (c) Cooking | (d) Smoking |
| 19. Fuel Engine, Food | (a) Body |
| (b) Fruit (c) Fins | (d) Breed |
| 20. Father Mother, Masculine..... | (a) Son |
| (b) Daughter (c) Feminine | (d) Masculine |

SECTION E

Instructions: Pick one word that does not belong to the group of word.

- | | | | | |
|----------|-----------------|--------------|-------------|--------------------|
| 21. | (a) Jump | (b) Run | (c) Sleep | (d) Walk |
| 22. | (a) Nest | (b) House | (c) Home | (d) Road |
| 23. | (a) Sing | (b) Calm | (c) Talk | (d) Whistle |
| 24. | (a) Subtraction | (b) Addition | (c) Reading | (d) Multiplication |
| 25. | (a) Water | (b) Bread | (c) Fanta | (d) Tea |

GENERAL PAPER

Answer All The Questions

Instructions; Read the following questions carefully and choose the correct answer from the options lettered A-D.

- To split work into different stages of occupation is known as
(a) Division of Trade (b) Unity of Business
(c) Division of Labour (d) Monopoly of Labour
- Paying of taxes is one of our (a) Civic responsibility
(b) Civic conflict (c) Civic Campaign (d) Citizen right
- Lagos State celebrated her 50th year in (a) 2008
(b) 2017 (c) 2018 (d) 2007
- family is made up of father, mother and children
(a) Extended (b) Nuclear
(c) Polygamous (d) Wealthy
- The head of Secondary school is called Principal, while the head of Polytechnic is called a (a) H.O.D (b) Rector
(c) Vice Chancellor (d) P/V
- Which of the government is nearest to the people?
(a) National government (b) Local government
(c) State government (d) National assembly
- What is the full meaning of NAFDAC? (a) National of Food Control
(b) National Agency for food and drugs Administration Control
(c) Nigerian Agency for fire and drought control
(d) National Agency for food and dogs Administration Control
- In Nigeria we have numbers of local government councils
(a) 788 (b) 774 (c) 775 (d) 776
- A child without parents is called an (a) Orphan
(b) Baby coil (c) Usher (d) Servant
- The Nigeria National flag has two colour combinations and
(a) Green and White (b) Green and Blue
(c) White and Blue (d) Grey and Yellow
- Kainji Dam is known as the dam in Nigeria (a) Smallest
(b) Larger (c) Largest (d) Strongest
- Whosoever exercise moderation in eating and drinking will have good
(a) Money (b) Job (c) Friend (d) Health

13. Bisimilaahi- Rahamani- rahim, Al-hamdu lilaahi Rabbil-Aalamin is said during (a) Zakat (b) Solat (c) Sleeping (d) Fighting
14. Civil society can be defined as the space between family, state and (a) Children (b) Animal (c) Market (d) Vehicle
15. Why do Muslim perform Hajj? (a) To make money (b) To fulfil the pillar of Islam (c) To trade (d) To encourage the poor
16. translated the Holy Bible into Yoruba (a) Bishop Samuel Ajayi Crowther (b) Mary Slessor (c) King Jaja of Opobo (d) Arch Bishop Aggrey
17. The background of the child also determines the growth and development of a child (a) Physical (b) Challenges (c) Trait (d) Couples
18. What type of transport system first linked Nigeria with other part of the World? (a) Air (b) Sea (c) Land (d) Rail
19. Monthly discharge of a blood from the womb is called (a) Menstruation (b) Blood Circuit (c) Menopause (d) Pregnancy
20. NDLEA is one of the agencies dealing with in Nigeria (a) Money trafficking (b) Fish trafficking (c) Fruit trafficking (d) Drugs trafficking
21. Emeka from Imo State marries Yetunde from Ogun State. This type of marriage is known as: (a) Inter-ethnic marriage (b) Intra-ethnic marriage (c) Native marriage (d) Traditional marriage
22. May 1st of every year in Nigeria is celebrated as day (a) Worker's (b) Children's (c) People's (d) Democracy
23. There are Local government council in Lagos state (a) 16 (b) 25 (c) 20 (d) 57
24. The popular festival in Lagos state is (a) Egungun (b) Eyo (c) Oro (d) Gelede
25. Farm machinery enables farmer to produce (a) Abundant food (b) Surplus water (c) Enough soil (d) Weeds

UNIFIED MOCK EXAMINATION

MATHEMATICS/QUANTITATIVE/VOCATIONAL PAPER

(TIME: 2 Hours)

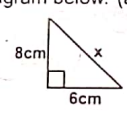
MATHEMATICS/QUANTITATIVE/VOCATIONAL PAPER

Instructions: Do not open this question booklet until you are told to do so. While you are waiting read the following instructions carefully:

- (i) Attempt all questions. Each question is followed by four options lettered A - E
- (ii) Find out the correct option and shade your answer with your pencil in your OMR sheet.
- (iii) Do not spend too much time on a question. If you find a question difficult, leave it and try again later.

MATHEMATICS OBJECTIVES QUESTIONS

1. Adu bought a pair of shoes for ₦5,000.00 and sold it for ₦4,000.00. What is his percentage loss? (a) 10 (b) 20 (c) 30 (d) 40 (e) 50
2. In a class, there are 30 girls and 45 boys. Find the ratio of girls to boys (a) 1 : 3 (b) 2 : 3 (c) 3 : 1 (d) 3 : 2 (e) 4 : 9
3. One-fourth of a number is 5. Find the number. (a) 10 (b) 15 (c) 20 (d) 25 (e) 30
4. A worker earns ₦4,000.00 per month. How much does he earn in $\frac{1}{2}$ a year? (a) ₦48,000.00 (b) ₦32,400.00 (c) ₦24,000.00 (d) ₦8,000.00 (e) ₦2,000.00
5. What must be subtracted from 3.10 to have 1.001? (a) 1.099 (b) 1.999 (c) 2.009 (d) 2.099 (e) 2.999
6. What is the cost of 60 oranges if 4 cost ₦20.00? (a) ₦480.00 (b) ₦400.00 (c) ₦300.00 (d) ₦150.00 (e) ₦48.00
7. Arrange the following fractions in ascending order: $\frac{3}{4}, \frac{5}{8}, \frac{7}{12}, \frac{2}{3}$
(a) $\frac{2}{3}, \frac{3}{4}, \frac{5}{8}, \frac{7}{12}$ (b) $\frac{3}{4}, \frac{5}{8}, \frac{7}{12}, \frac{2}{3}$ (c) $\frac{7}{12}, \frac{5}{8}, \frac{2}{3}, \frac{3}{4}$
(d) $\frac{5}{8}, \frac{7}{12}, \frac{3}{4}, \frac{2}{3}$ (e) $\frac{2}{3}, \frac{3}{4}, \frac{7}{12}, \frac{5}{8}$
8. What is the place value of 5 in 504.13? (a) 5 hundreds (b) 5 hundredths (c) 5 tens (d) 5 thousands (e) 5 units
9. In a school, there are 478 boys and 329 girls. How many pupils are in the school altogether? (a) 908 (b) 847 (c) 817 (d) 807 (e) 708
10. The difference of two numbers is 60. If the smaller number is 90, what is their sum? (a) 300 (b) 240 (c) 230 (d) 150 (e) 125
11. How many seconds make up $3\frac{1}{2}$ minutes? (a) 240 (b) 210 (c) 180 (d) 120 (e) 60
12. Write in figure: Twelve thousand, seven hundred and two (a) 12000702 (b) 1200702 (c) 127002 (d) 120702 (e) 12702
13. Write 30385 in words (a) Three thousand, three hundred and eighty five (b) Three thousand, three hundred and fifty eight (c) Thirty thousand, three hundred and eighty five

- (d) Thirty thousand, eight hundred and five
(e) Thirty three thousand and eighty five
 14. Find the square root of $3\frac{6}{25}$
(a) $1\frac{2}{3}$ (b) $1\frac{4}{5}$ (c) $2\frac{1}{5}$ (d) $2\frac{4}{5}$ (e) $3\frac{2}{5}$
 15. Bola deposits ₦5,000.00 in a savings bank account. If she is paid an interest rate of 5% per annum for 2 years, how much is the simple interest? (a) ₦20.00 (b) ₦50.00 (c) ₦100.00 (d) ₦200.00 (e) ₦500.00
 16. Change $4\frac{1}{2}$ days into hours (a) 42 (b) 72 (c) $72\frac{1}{2}$ (d) 88 (e) 108
 17. Igbo bought five books at ₦40.00 each and sold them for ₦150.00. What is the loss? (a) ₦50.00 (b) ₦45.00 (c) ₦40.00 (d) ₦30.00 (e) ₦5.00
 18. Find x side in the diagram below. (a) 100 (b) 10 (c) 5 (d) 64
- 
19. An equilateral triangle has lines of symmetry (a) 4 (b) 1 (c) 3 (d) 2
 20. Find x if $3x + 5 = 20$. (a) 15 (b) 5 (c) 10 (d) 6
 21. I bought 8 books for ₦2,400. How many such books can I buy for ₦6,000? (a) 22 (b) 20 (c) 18 (d) 19
 22. The sum of three numbers is 25,600, two of them are 7,399 and 8,790. What is the other? (a) 15,070 (b) 16,600 (c) 7,720 (d) 9,411
 23. How many seconds are there in 6 minutes, 25 seconds? (a) 220 seconds (b) 389 seconds (c) 285 seconds (d) 485 seconds
 24. If angle $x + y + z = 180^\circ$, and $x + y = 125^\circ$. What is angle z? (a) 65° (b) 44° (c) 45° (d) 100°
 25. Alamu conducted a meeting from 9.05am to 5.55pm on a certain day, for how long did the meeting take? (a) 8hrs 45 min (b) 8hrs 50 min (c) 8hrs 30 min (d) 10hrs 10 min
 26. A school bag contain 24 books of which 6 are blue, 10 are red, 8 are green. What is the probability of picking a red biro at random from the bag (a) $\frac{3}{12}$ (b) $\frac{5}{12}$ (c) $\frac{7}{12}$ (d) $\frac{9}{12}$
 27. Find the area of a circle whose radius is 7cm, area = πr^2 (a) 225cm^2 (b) 144cm^2 (c) 155cm^2 (d) 154cm^2

28. Tax deducted from the taxable income of an employee is 15k on every Naira. Find the tax paid if his taxable income is ₦3,000
(a) ₦300 (b) ₦450 (c) ₦200 (d) ₦500
29. Lawal has ₦2,500 and Adesola ₦1,150, how much should Lawal give Adesola so that they may each have the same amount?
(a) ₦1,850 (b) ₦1,450 (c) ₦675 (d) ₦1,350
30. Simplify $\sqrt{144} - 2^2 + 4^2$.
(a) 25 (b) 80 (c) 16 (d) 24
31. Add up $96.21 + 163.0 + 33.11 + 6.72$ (a) 22.904
(b) 2290.4 (c) 229.04 (d) 2.2904
32. Arrange these in ascending order. $\frac{1}{2}, \frac{2}{3}, \frac{3}{4}, \frac{1}{5}$ (a) $\frac{2}{3}, \frac{1}{2}, \frac{3}{4}, \frac{1}{5}$
(b) $\frac{1}{2}, \frac{3}{4}, \frac{2}{3}, \frac{1}{5}$ (c) $\frac{3}{4}, \frac{2}{3}, \frac{1}{2}, \frac{1}{5}$ (d) $\frac{1}{5}, \frac{3}{4}, \frac{1}{2}, \frac{2}{3}$
33. How many minutes are there in $1\frac{1}{4}$ hrs. (a) 70 mins
(b) 140 mins (c) 105 mins (d) 110 mins
34. Subtract the sum of 8.33 and 5.92 from 10.25
(a) 4.000 (b) 40.00 (c) 04.00 (d) 4.0
35. What is the L.C.M of 8, 16 and 24?
(a) 10 (b) 11 (c) 12 (d) 48
36. What is the square of 25?
(a) 655 (b) 225 (c) 325 (d) 625
37. Simplify $3x + 4x - 12x$ (a) $-4x$ (b) $4x$ (c) $-x$ (d) $12x$
38. Find the cost of 120 shares at the rate of 35 kobo per share
(a) ₦49.00 (b) ₦48.00 (c) ₦38.00 (d) ₦50
39. When three is added to a number and the result is thirty, find the number
(a) 16 (b) 17 (c) 22 (d) 27
40. If a car travels at a uniform speed of 60km/h. What distance does it cover in $2\frac{1}{2}$ hrs?
(a) 120km (b) 150km (c) 250km (d) 9km
41. If 7 oranges cost ₦35.00, find the cost of 3 oranges
(a) ₦15 (b) ₦17 (c) ₦20 (d) ₦28
42. The sum of 25 and 72 is divided by the product of 5 and 12, find the result
(a) 10 (b) 5 (c) 8 (d) 100
43. Four years ago a boy was six years old. How old will he be in five years time?
(a) 15 (b) 16 (c) 14 (d) 13
44. Calculate $\frac{1}{5}$ of 100. (a) 30 (b) 25 (c) 20 (d) 35

45. A typist can type 450 words in 10 minutes. How many words can she type in 3 minutes? (a) 15 (c) 90 (c) 100 (d) 135
46. What is 25% of 60kg? (a) 25kg (b) 15kg (c) 100kg (d) 35kg
47. How many tens are there in 50,000? (a) 50
(b) 500 (c) 5,000 (d) 25
48. The total length of three pieces of string is 8.4m. Two of them are 0.53 and 4.64m, what is the third numbers? (a) 3.23 (b) 3.25 (c) 32.3 (d) 3.12
49. Multiply two hundred and forty five by five hundred and eight.
(a) 125,460 (b) 124,460 (c) 124,060 (d) 126,460
50. Each box holds 156 tins. How many tins are there in 128 boxes?
(a) 19,868 (b) 19,968 (c) 19,698 (d) 19,096

PART B

QUANTITATIVE REASONING QUESTIONS

Sample A: $\frac{27 (+) 2}{9 (-) 3} = \frac{54}{3} = 18$ $\frac{16 (+) 3}{24 (-) 6} = \frac{48}{4} = 12$

Use the sample above to answer question 1 - 5

1. $\frac{4 (+) 9}{12 (-) 2} = \frac{36}{6} = ?$ (a) 7 (b) 8 (c) 6 (d) 9
2. $\frac{11 (+) 6}{44 (-) 2} = \frac{66}{22} = ?$ (a) 2 (b) 6 (c) 3 (d) 12
3. $\frac{9 (+) 12}{54 (-) 6} = \frac{?}{9} = 12$ (a) 92 (b) 108 (c) 36 (d) 100
4. $\frac{15 (+) 15}{125 (-) 5} = \frac{225}{25} = ?$ (a) 9 (b) 7 (c) 8 (d) 12
5. $\frac{3 (+) 9}{9 (-) 3} = \frac{?}{3} = 9$ (a) 28 (b) 29 (c) 30 (d) 27

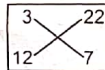
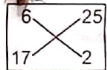
Sample B: $2(5 + 2) = 14$ $3(4 + 2) = 14$
Use the above information to answer question 6 - 10

6. $4(6 + 2) = ?$ (a) 26 (b) 24 (c) 25 (d) 28
 7. $3(4 + 10) = ?$ (a) 24 (b) 22 (c) 29 (d) 30
 8. $3(? + 7) = 16$ (a) 2 (b) 1 (c) 3 (d) 4
 9. $5(? + 10) = 40$ (a) 25 (b) 7 (c) 8 (d) 6
 10. $4(4 + ?) = 20$ (a) 4 (b) 5 (c) 6 (d) 7

Sample C: The word **EDUCATION** is represented by 546317298
Use the above information to answer question 11 - 15

11. The word **NATION** is represented by (a) 817298
 (b) 817829 (c) 821789 (d) 812798
 12. The word **ACTION** is represented by (a) 125678
 (b) 138257 (c) 137298 (d) 137829
 13. The word **UNION** is represented by (a) 68294
 (a) 68298 (c) 68928 (d) 67298
 14. The number "316728" would be represented by (a) cation
 (b) catron (c) caution (d) caution
 15. The number "453145" would be represented by (a) decade
 (b) dedac (c) dacade (d) decde

Sample D:



Use the sample above to answer question 1 - 5

16. (a) 33 (b) 44
 (c) 34 (d) 28
 17. (a) 4 (b) 3
 (c) 5 (d) 6
 18. (a) 7 (b) 6
 (c) 5 (d) 9
 19. (a) 22 (b) 23
 (b) 21 (c) 20
 20. (a) 2 (b) 3
 (c) 4 (d) 6

Sample E:

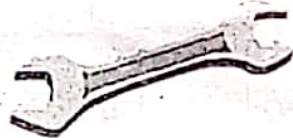


21. (a) 24 (b) 22
 (c) 23 (d) 49
 22. (a) 15 (b) 25
 (c) 5 (d) 10
 23. (a) 13 (b) 15
 (c) 14 (d) 20
 24. (a) 60 (b) 63
 (c) 70 (d) 24
 25. (a) 17 (b) 13
 (c) 15 (d) 14

VOCATIONAL QUESTIONS

1. The instrument used for measuring clothe is (a) ruler
 (b) tape (c) tape rule (d) machine
 2. Occupation refers to the job that (a) someone does to earn an income
 (b) someone does to oppress others
 (c) someone does occasionally (d) brings step back to some
 3. The person that works on water system or bore hole water is called
 (a) Welder (b) Plumber (c) Printer (d) Carpenter
 4. Friction is needed in which part of a bicycle? (a) brake (b) chain
 (c) spokes (d) handle bars
 5. The part of computer system that shows data on a screen is known as
 (a) keyboard (b) typing (c) booting (d) monitor
 6. Shutting down is the term for the computer (a) coming up
 (b) putting off (c) putting on (d) putting time of
 7. stitching is the best option, if we want our mats to look attractive.
 (a) machine (b) hand (c) ordinary (d) temporary
 8. Virus can be transferred through a into another computer.
 (a) flash drive (b) operator (c) monitor (d) keyboard
 9. Selling of snacks, chin-chin and pop corn can bring in
 (a) mockery (b) shameless (c) demotion (d) money
 10. All of the following tools are used by electrician except
 (a) plier (b) tester (c) screw driver (d) candle

11. Shoes are made by the (a) shoe shiner (b) cobbler
(c) plumber (d) potter
12. The person whose work is to take care of the teeth and also treat the diseases of the teeth is called (a) vestuary (b) dentist
(c) optician (d) nurse
13. The study and treatment of medical conditions that affect only women is called (a) physiologist (b) gynecology (c) geography (d) theology
14. A is a place where we keep our money for safety and future use.
(a) bank (b) ceiling (c) cooperative (d) hole
15. The following are the product that are made of wood and made by wood maker except (a) cupboard (b) bicycle chain
(c) door frame (d) window frame
16. is the work of job which involves the washing and ironing of clothes. (a) laundry (b) washer (c) watering (d) plumbing
17. The process of growing and taking care of different types of plants, vegetables and flowers is called (a) horticola
(b) horticulture (c) plant culture (d) seeding
18. Crude oil is taken from the ground through a method known as
(a) digging (b) copping (c) drilling (d) bedding
19. Which of the following is used in making cement? (a) limestone
(b) heed (c) iron ore (d) asbestos
- 20.



- This tool is used for (a) turning bolts and nut (b) nailing
(c) hitting nails into wood (d) shaping wood
21. Which of these tools is used for cutting hair and trimming of beard.
(a) brush (b) razor blade (c) clipper (d) sickle
22. A person who give instruction on how to use computer is known as
(a) operator (b) computer instructor
(c) computer engineer (d) computer informant
23. involves the act of buying and selling of goods which can be done locally or internationally (a) buyers (b) trading (c) schooling (d) juggling
24. Electricity does not flow through rubber, so rubber is?
(a) a conductor (b) a circuit (c) an insulator (d) a condenser
25. Soil is formed from rocks by the action of (a) wind
(b) rain (b) the weather (c) machines