



LAGOS STATE UNIVERSAL BASIC EDUCATION BOARD
3RD TERM UNIFIED EXAMINATION, JULY 2019
PRIMARY ONE

NAME OF SCHOOL: _____

PUPIL'S NAME: _____

CLASS: PRIMARY ONE


SUBJECT: BASIC SCIENCE AND TECHNOLOGY (60 Marks)


DURATION: 1 HOUR


BASIC SCIENCE


INSTRUCTION: Read thoroughly and pick the correct answer within the given alternatives.

1. The following are examples of living things except one.

(a) fish 

(c) man 

(b) tree 

(d) table 

2. Living things can from one place to another.

(a) move (b) stand still (c) jump (d) dance

3. How many fingers do you have?





(a) One (b) Eight (c) Two (d) Five

4. Living things can response to these except


(a) feed (b) jump (c) move (d) stand still

5. is an example of simple machine.


(a) Spoon 


(b) Television 


(c) Fan 

(d) Can 





















6. is used to sweep floor at home.

(a) Broom 

(b) Chair 



(c) Basket 

(d) Book 

7. We use to cut yam at home.
 (a) knife  (b) scissors  (c) fork  (d) pencil 
8. Rainbow has colours.
 (a) four (b) seven (c) five (d) ten
9. Which of these objects can sink in water?
 (a) Stone (b) Paper (c) Poly bag (d) Nylon
10. One of these cannot be found in the classroom.
 (a) ruler  (c) snake 
 (b) book  (d) table 
11. You can make water clean by
 (a) adding alum (b) adding oil (c) pouring sand (d) adding soap
12. is present everywhere.
 (a) Water (b) Air (c) Rain (d) Plant
13. We use our eyes to
 (a) dance (b) fight (c) see (d) smell
14. All these are non-living things except
 (a) chair  (c) bag 
 (b) table  (d) tree 
15. The cock
 (a) hiss (b) moos (c) roar (d) crow
16. is a bad habit.
 (a) Food (b) Smoking (c) Eating (d) Sleeping
17. The following are good sources of water except
 (a) tap  (c) river 
 (b) well  (d) bucket 
18. Which of these soil is good for planting?
 (a) Sandy soil (b) Clay soil (c) Loamy soil (d) Rocky
19. Which of these can float on water?
 (a) Stone (b) Sand (c) Ballon (d) Iron
20. Technology in the home is
 (a) radio  (c) cup 
 (b) box  (d) table 

AGRICULTURE SCIENCE

INSTRUCTION: Read thoroughly and pick the correct answer within the given alternatives. •









1. Farm animals can be used for
(a) dancing (b) transportation (c) block-making (d) jumping
2. Farmers plant their crops in the
(a) soil (b) book (c) table (d) sky
3. We can purify water by adding
(a) alum (b) petrol (c) sugar (d) ink
4. This is a

(a) pot (b) tree (c) roof (d) book
5. plants crops in the farm.
(a) Teacher (b) Farmer (c) Doctor (d) Trader
6. Identify the fruit below.

(a) Guava (b) Pawpaw (c) Tomato (d) Pineapple
7. Food stuff brought to the market from the
(a) farm (b) library (c) school (d) hospital
8. We use for food and medicine.
(a) leaves (b) stone (c) sand (d) plastic
9. plant is dangerous to our health.
(a) Sweet (b) Tobacco (c) Yam (d) Orange
10. are used to beautify our surroundings.
(a) Flowers (b) Cups (c) Book (d)
11. is local farm animal.
(a) Lion (b) Stone (c) Goat (d) Car
12. is common crops plant around us.
(a) Mango (b) Cassava (c) Gas (d) Water
13. is a types of land.
(a) Flat land (b) Land pollution (c) Movement land (d) environment land
14. Things that pollute the air include the following except
(a) air from air-conditioner (b) smokes form cars
(c) smoke from generator (d) small from refuse dumps
15. There are types of soil.
(a) four (b) one (c) three (d) six

16. is an energy giving food.
(a) Cassava (b) Beans (c) Fish (d) Meat
17. Which of these is a basic need for both plants and animals.
(a) Sand (b) Grass (c) Water (d) Rice
18. feeds on cassava peel and grass.
(a) Goat (b) Chicken (c) Fish (d) Buck
19. help to dry things and warm our body.
(a) Sun (b) Rain (c) Star (d) Water
20. What can we gain from Agriculture?
(a) Fighting and boxing (b) Power and strength
(c) Spoon and pot (d) Food and employment

PHYSICAL AND HEALTH EDUCATION

INSTRUCTION: Read thoroughly and pick the correct answer within the given alternatives.









1. An example of field event is
(a) 100m race (b) 200m race (c) high jump (d) 50m race
2. Food make us well.
(a) cry (b) weak (c) sing (d) grow
3. We use in running relay race.
(a) baton (b) stick (c) biro (d) ruler
4. Meal that contains all classes of food is called
(a) balanced diet (b) balanced sleep (c) good food (d) balanced meal
5. We use to wash our teeth.
(a) stone (b) tooth brush (c) stick (d) oil
6. Basic skill in high jump is
(a) walking (b) landing (c) sleeping (d) dancing
7. We wear for swimming.
(a) school uniform (b) bluse (c) swimming trunk (d) coat
8. The birds moves from one place to another by
(a) jumping (b) hopping (c) swimming (d) flying
9. Akara is prepared by using method of cooking.
(a) baking (b) stewing (c) frying (d) roasting
10. Water can be purified by
(a) boiling (b) putting sand (c) adding salt (d) adding sweet
11. Our finger nail should be cut
(a) big (b) long (c) bigger (d) short





























12. We play football on the
 (a) sitting room (b) classroom (c) bedroom (d) field
13. The treatment given to an injured person before taking him/her to doctor in the hospital is called
 (a) cleaning (b) first aid (c) first aid box (d) bandage
14. Bathing with dirty water can cause
 (a) burns (b) pain (c) skin diseases (d) sleeping
15. An example of track event is
 (a) high jump (b) 100m race (c) long jump (d) basket ball
16. One of these is not an exercise.
 (a) jumping (b) running (c) skipping (d) sleeping
17. We see with our
 (a) eyes  (b) mouth  (c) ear  (d) leg 
18. Water on the floor can cause
 (a) eating (b) sleeping (c) fighting (d) accident
19. We use to sweep our house.
 (a) broom  (b) yam  (c) spoon  (d) book 
20. gives us energy.

- (a) food  (b) book  (c) ruler  (d) cup 

HOME ECONOMICS

INSTRUCTION: Read thoroughly and pick the correct answer within the given alternatives.

1. Which of the following material is not used for taking care of the body?
 (a) soap  (b) body cream  (c) vim  (d) sponge 
2. We cook food in the
 (a) kitchen (b) living room (c) garage (d) store
3. We sleep on our at home.
 (a) book  (b) bed  (c) bottle  (d) bag 
4. We should our food against flies.
 (a) open (b) drain (c) cover (d) eat

5. Our toilet should be always.
 (a) Dirty (b) rough (c) clean (d) smelling
6. We should keep our cutleries in the
 (a) bedroom (b) kitchen (c) toilet (d) living room
7. All these are functions of teeth except
 (a) biting (b) cutting (c) chewing (d) swallowing
8. can be found in the bedroom.
 (a) Stone  (b) Soap  (c) Pillow  (d) Cup 
9. The organ for seeing is
 (a) eyes  (b) nose  (c) hand  (d) leg 
10. We should wash our hands before and after meal.
 (a) Yes (b) not always (c) No (d) None
11. One of these is part of the body.
 (a) Mango  (b) Nose  (c) Bowl  (d) Leaf 
12. We eat to grow properly.
 (a) biscuit (b) stone (c) bottle (d) food
13. We use to fetch water.
 (a) bucket  (b) cup  (c) plate  (d) bottle 
14. is an example of hair infection.
 (a) Fever (b) Dandruff (c) Malaria (d) Polio
15. Sponge and soap can be found in
 (a) bedroom (b) dinning room (c) bathroom (d) kitchen
16. causes tooth decay.
 (a) Pot  (b) Sweet  (c) Cup  (d) Ruler 
17. Don't talk while
 (a) eating (b) playing (c) fighting (d) greeting
18. We use to comb our hair.
 (a) chalk  (b) pencil  (c) comb  (d) sand 
19. we get protein from
 (a) fish  (b) sun  (c) apple  (d) pot 
20. We use to beautify our homes.
 (a) charcoal (b) flowers (c) urine (d) dirt



LAGOS STATE UNIVERSAL BASIC EDUCATION BOARD
3RD TERM UNIFIED EXAMINATION, JULY 2019
PRIMARY TWO

NAME OF SCHOOL: _____

PUPIL'S NAME: _____

CLASS: PRIMARY TWO






SUBJECT: BASIC SCIENCE AND TECHNOLOGY (60 Marks)

DURATION: 1 HOUR

BASIC SCIENCE

INSTRUCTION: Read thoroughly and pick the correct answer within the given alternatives.

1. is a sense organ for hearing.
(a) Tongue (c) Skin (b) Ear (d) Nose
2. Clay soil is good for
(a) planting (b) building (c) sleeping (d) moulding
3. Track events always take place on the
(a) office (b) classroom (c) field (d) water
4. Movement of our body parts is called
(a) locomotion (b) circulation (c) skeleton (d) joint
5. causes air pollution.
(a) Sleeping (b) Eating (c) Drinking (d) Smoke
6. Rainbow has colours.
(a) 6 (b) 7 (c) 2 (d) 8
7. Part of the plant that hold it firmly to the ground is called
(a) root (b) fruit (c) stem (d) flower
8. Which of these animals barks?
(a) Goat (b) Dog (c) Hen (d) Bird
9. device is use to make calls.
(a) Monitor (b) CPU (c) Mobile phone (d) Speaker
10. Air in motion is called
(a) wind (b) temperature (c) rain (d) blowing
11. Which animals helps to suggest time in the olden days.
(a) Goat (b) Fish (c) Cock (d) Lizard

12. All of these objects sink in water except
 (a) stone (b) feather (c) iron (d) lizard
13. Plant and animals are known as
 (a) living things (b) non living things
 (c) human being (d) durable things
14. The metric unit for measuring mass is
 (a) centimetre (b) gramme (c) litres (d) kilometre
15. is the immediate treatment given to an injured person.
 (a) Injection (b) Tablet (c) First aid (d) First class
16. This is a 
 (a) leaf (c) biro
 (b) book (d) shoe
17. Which animal sound moo?
 (a) Rat (b) Goat (c) Cow (d) Dog
18. Water can be purified by all of these except
 (a) boiling (b) frying (c) filtering (d) adding alum
19. First aid box contains all these except
 (a) cotton wool (b) bandage (c) scissors (d) injection
20. is the sense of sight.
 (a) Ear  (b) Nose  (c) Eye  (d) Hand 

AGRICULTURE SCIENCE

INSTRUCTION: Read thoroughly and pick the correct answer within the given alternatives.

1. Earthworm is a to farmers on the farm.
 (a) father (b) mother (c) friend (d) enemies
2. The following are examples of harmful insects except
 (a) tsetse fly (b) flies (c) mosquito (d) hoe
3. We maintain our farm tools by
 (a) bending (b) oiling (c) pouring water (d) braking
4. The insects and animals that destroy crops are known as farmer's
 (a) uncle (b) parent (c) friends (d) enemy

5. This diagram is known as

- (a) bucket
- (b) pencil
- (c) watering can
- (d) basket



6. is a farm tool used for gathering weed.

- (a) Cutlass
- (b) Hoe
- (c) Rake
- (d) Basket

7. Farm tools cannot be prevented from rusting through which of the following.

- (a) Washing
- (b) Keep clean
- (c) Oiling
- (d) Through damaging

8. Food we get from animal include

- (a) yam
- (b) beans
- (c) meat
- (d) corn

9. Chemical can be used to control insects.

- (a) No
- (b) Yes
- (c) I don't know
- (d) None of the above

10. Wheel barrow is one of the simple farm tools for farm produce.

- (a) cutting
- (b) carrying
- (c) digging
- (d) gathering

11. is an example of tuber crop.

- (a) Okro
- (b) Corn
- (c) Cassava
- (d) Beans

12. Grasshopper and tse-tse fly are insect on the farm.

- (a) useful
- (b) good
- (c) harmful
- (d) happy

13. Some leaves serves as

- (a) food
- (b) enemy
- (c) writing
- (d) playing

14. Crops are planted during season.

- (a) dry
- (b) rainy
- (c) harmattan
- (d) sunny

15. We dry grains and store them in

- (a) sacks
- (b) road
- (c) book
- (d) keg

16. Mosquito bite can be prevented by

- (a) killing them
- (b) sleeping under treated nets
- (c) bathing
- (d) dancing

17. Small stone breaking into pieces can become

- (a) food
- (b) soil
- (c) fruit
- (d) bottle

18. Digger is used for

- (a) cutting
- (b) carrying
- (c) digging
- (d) booking

19. losses the soil to allow water and air to penetrate.

- (a) Snake
- (b) Rat
- (c) Earthworm
- (d) Cray

20. is a types of soil expect.

- (a) Sandy
- (b) Loamy
- (c) Clay
- (d) Water

PHYSICAL AND HEALTH EDUCATION

INSTRUCTION: Read thoroughly and pick the correct answer within the given alternatives.

1. Which of these is not the way by which water can be purified?
(a) by using oil (b) by boiling (c) by filtering (d) by using chemical
2. Smoke from vehicle and generator can cause
(a) body pollution (b) sun pollution (c) air pollution (d) rain pollution
3. This object is called
(a) spoon (b) ball (c) moon (d) bag
4. Which of these is not an example of locomotor movement?
(a) Skipping (b) Galloping (c) Sleeping (d) Jumping
5. All of these require first aid treatment except
(a) fighting (b) bleeding (c) fainting (d) bruises
6. A person that stays at the goalpost to prevent goals is called
(a) teacher (b) goal keeper (c) pastor (d) dancer
7. Jumping is part of
(a) exercise (b) sleeping (c) resting (d) bleeding
8. Which of these can affect our sleep?
(a) Clothes (b) Shoe (c) Noise making (d) Bag
9. Movement of our body parts is called
(a) circulation (b) locomotor (c) skeleton (d) motivation
10. Basketball is played with
(a) legs (b) bat (c) hand (d) stick
11. Fundamental movements go along with
(a) rhythms (b) sleeping (c) fighting (d) bathing
12. is one of the content inside first aid box.
(a) Sweet (b) Salt (c) Bandage (d) Herb
13. One of the skills in basket ball is
(a) sitting (b) throwing (c) kicking (d) crawling
14. An official who directs the affair of a football on the field is called
(a) goalkeeper (b) teacher (c) referee (d) doctor
15. We must keep our environment
(a) clean (b) dirty (c) bushy (d) noisy
16. Which of these is not sources of water?
(a) Tap (b) Rain (c) Bucket (d) Bore hole
17. The first treatment given to an injured person before taken to the hospital is called
(a) first aid (b) first class (c) first born (d) first come

18. Track event include the following except
 (a) 100m (b) basketball (c) 200m (d) 400m
19. Safety means to be free from
 (a) eating and drinking (b) dancing and talking
 (c) running and playing (d) injury and damages
20. Athlete exchange in relay race.
 (a) baton (b) ball (c) rope (d) words

HOME ECONOMICS

INSTRUCTION: Read thoroughly and pick the correct answer within the given alternatives.

1. Harmful substances are to the body.
 (a) good (b) dangerous (c) helpful (d) nice
2. Where can the bed be found in the home?
 (a) Sitting room (b) Store (c) Bedroom (d) Dinning
3. Cooker and stove are items found in the
 (a) kitchen (b) toilet (c) bathroom (d) store
4. A fter bathing, we use to dry our body.
 (a) socks (b) sponge (c) towel (d) pant
5. protect our body from bad weather.
 (a) Comb (b) Clothes (c) Wrist watch (d) handkerchief
6. is the natural state of rest.
 (a) Sleep (b) Fight (c) Exercise (d) Abuse
7. is anything we eat either in liquid or solid to sustain life.
 (a) Stone (b) Sand (c) Food (d) Poison
8. Why should we preserve our food?
 (a) to spoil it (c) to kill it
 (b) to waste it (d) to prevent spoilage and wastage
9. Furniture chairs can be found in the
 (a) sitting room (b) toilet (c) kitchen (d) bathroom
10. is the diet that contains all the food nutrient in the right proportion.
 (a) Balanced book (b) Balanced chair (c) Balanced diet (d) Balanced water
11. Where do we take our bath?
 (a) Kitchen (b) Bathroom (c) Bedroom (d) Sitting room
12. Using another person tooth brush can cause
 (a) teeth infection (b) good teeth (c) clean teeth (d) fine teeth

13. We sweep our kitchen every
(a) week (b) year (c) day (d) month
14. Which of the following are most perishable foods?
(a) Yam and garri (b) Beans and rice (c) Semo and wheat (d) fish and meat
15. Do not collect gift from
(a) a friend (b) a stranger (c) your brother (d) your sister
16. Which of these places do we receive visitors?
(a) Sitting room (b) Store (c) Kitchen (d) Bedroom
17. Talking while eating is a habit.
(a) fine (b) bad (c) good (d) strange
18. We on the cushion chair in the sitting room.
(a) sleep (b) bath (c) cook (d) sit
19. Eating of rotten fruits can be to our body.
(a) harmful (b) fire (c) good (d) better
20. Which of these is not an exercise?
(a) Dancing (b) Walking (c) Jumping (d) Sleeping



LAGOS STATE UNIVERSAL BASIC EDUCATION BOARD
3RD TERM UNIFIED EXAMINATION, JULY 2019
PRIMARY THREE

NAME OF SCHOOL: _____

PUPIL'S NAME: _____

CLASS: PRIMARY THREE

SUBJECT: BASIC SCIENCE AND TECHNOLOGY (60 Marks)

DURATION: 1 HOUR

BASIC SCIENCE

INSTRUCTION: Read thoroughly and pick the correct answer within the given alternatives.

1. The following are qualities of good water except
(a) water tap (c) bore-hole well (b) school pond (d) muddy pool
2. The following are sources of light except one
(a) torch (b) star (c) sun (d) wall
3. The sources of water are except
(a) river (b) tap water (c) well (d) sand
4. Which of these is not a source of light?
(a) sun (b) bulb (c) torch (d) balloon
5. Air in motion is called
(a) money (b) wind (c) blow (d) flower
6. One of these substances can contaminate water.
(a) Milk (b) Sugar (c) Petrol (d) Milo
7. Which of the following is not used for purifying water?
(a) Filtration (b) Adding alum (c) Adding petrol (d) Adding chlorine
8. is an instrument used for measuring time.
(a) Stone (b) Plate (c) Watch (d) Book
9. In the old days, the following are the methods of telling time except
(a) cock crow (b) shadow (c) sun (d) clock
10. All these are uses of water except one.
(a) Cooking (b) Washing (c) Bathing (d) Reading
11. The following are characteristics of technology except one.
(a) Fast (b) Easy to operate (c) Efficient (d) Redundant

7. Unripe fruits can cause stomach trouble.
(a) True (b) False (c) None of the above (d) All of the above
8. A simple farm tool used for carrying farm products from farm is called
(a) hand towel (b) spade (c) basket (d) rake
9. Tomatoes is an example of
(a) vegetable (b) vitamins (c) minerals (d) protein
10. is the example of grain crops.
(a) Millet (b) Cassava (c) Yam (d) Banana
11. The following are example of ornamental crop except
(a) hibiscus (b) mango plant (c) sun flower (d) lawn grass
12. crops is used for beautification.
(a) Coco yam (b) Ornamental (c) Cocoa tree (d) All of the above
13. Palm oil can be used for the following except
(a) washing clothes (b) soap making (c) cooking soup (d) frying
14. We maintain our farm tool by
(a) bending (b) braking (c) oiling (d) soaking in water
15. Which of the following is not an example of vegetable crop?
(a) Okro (b) Cabbage (c) Sun flower (d) Pepper
16. Carbohydrate foods give
(a) energy (b) protein (c) mineral (d) vitamins
17. soil is used for moulding objects.
(a) Sandy soil (b) Loamy soil (c) Clay soil (d) Humus soil
18. is the animal that lives in the soil.
(a) Earthworm (b) Mosquito (c) Frog (d) Fish
19. The chemical substance added to the soil to increase the soil fertility is
(a) food (b) fertilizer (c) water (d) black soil
20. Farm tools are oiled to avoid
(a) breaking (b) rusting (c) shinning (d) bending

PHYSICAL AND HEALTH EDUCATION

INSTRUCTION: Read thoroughly and pick the correct answer within the given alternatives.

1. The following are components of physical fitness except one.
(a) Endurance (b) Strength (c) Agility (d) Jogging
2. The shortest distance covered during a sprint race is
(a) 50 meters (b) 100 meters (c) 400 meters (d) 200 meters
3. An official who directs the affairs of a football is called.....
(a) player (b) referee (c) coach (d) goalkeeper

4. is an example of locomotor movement.
(a) Jogging (b) Sleeping (c) Sitting (d) Clapping
5. Safety means free from
(a) eating and drinking (b) injury and damage
(c) dancing and talking (d) all of the above
6. The immediate treatment given to an injure person before taking him to the hospital is known as
(a) first aid box (b) first aid content (c) first aid (d) first class
7. The four major stages of high jump are run-up, take off, bar clearance and
(a) sitting (b) landing (c) jumping (d) flying
8. The basic skills of table tennis are the following except
(a) grip (b) service (c) forehand servicing (d) heading
9. One of the safety rules in swimming is that you do not swim immediately after a meal.
(a) Yes (b) No (c) All of the above (d) None of the above
10. Technology makes life
(a) better (b) bad (c) wasteful (d) dangerous
11. Field events are performed on the
(a) track (b) field (c) office (d) classroom
12. The following are basic skills in football except
(a) passing (b) kicking (c) dancing (d) heading
13. Wash your after visiting the toilet.
(a) head (b) leg (c) face (d) hand
14. is unwanted sound which causes unpleasant effect and discomfort to the ears.
(a) Air (b) Noise (c) Water (d) Land
15. The following are example of pollution except
(a) noise pollution (b) air pollution (c) water and land pollution (d) book pollution
16. The two basic styles in swimming are breaststroke style and
(a) jumping style (b) butterfly style (c) dancing style (d) sleeping style
17. The major skills of football are passing, kicking, trapping and
(a) grip (b) throwing (c) service (d) breaststroke style
18. Crawling, jogging, skipping are examples of movement.
(a) fundamental movement (b) creative movement
(c) locomotive movement (d) all of the above
19. Good hygiene is the act of taking care of ourself and environment.
(a) True (b) False (c) All of the above (d) None of the above
20. Which of these is not a field event?
(a) Football (b) Running (c) Jumping (d) Swimming

HOME ECONOMICS

INSTRUCTION: Read thoroughly and pick the correct answer within the given alternatives.

1. We use to straighten and smoothen the hair.
(a) soap (b) cutting comb (c) cream (d) comb
2. Which of the following materials is not used for taking care of body?
(a) Soap (b) Vim (c) Body cream (d) Sponge
3. We use to chew food when eating.
(a) eyes (b) lips (c) teeth (d) hand
4. is not an example of hair infections.
(a) Lice (b) Dandruff (c) HIV (d) Ringworm
5. Materials for cleaning the mouth are divided into traditional and
(a) new school (b) modern (c) pencil (d) old
6. An example of personal belonging is
(a) school (b) trees (c) school bag (d) Mosque
7. Using another person tooth brush can cause
(a) infection (b) mouth odour (c) good teeth (d) baby teeth
8. Dirty clothes can give us skin
(a) infection (b) beauty (c) yellow (d) good
9. Balanced diet provide for work and play.
(a) energy (b) play (c) dance (d) sleep
10. All of these are parts of the body except
(a) mouth (b) head (c) tree (d) leg
11. We wear to cover our nakedness.
(a) bag (b) clothes (c) paper (d) nylon
12. Water closet is a type of toilet.
(a) old (b) modern (c) brush (d) table
13. We wear socks, shoes and slippers on our
(a) head (b) hand (c) feet (d) neck
14. Which of these clothes are needed for school?
(a) Biro and book (b) Iro and buba (c) School uniform (d) Blanket
15. is a place we take our bath.
(a) Kitchen (b) Bathroom (c) Bed room (d) Common room
16. Which of these is not a tools for cleaning the bedroom?
(a) Comb (b) Brush (c) Broom (d) Mop

17. is the outer layer of covering of the body.
(a) Leather (b) Skin (c) Nylon (d) Clothes
18. Which of these is not an article of skin care.
(a) Body lotion (b) Bathing soap (c) Sponge (d) Pot
19. We care for our skin by
(a) eating healthy food (b) eating unbalanced diet
(c) smoking india hemp (d) rubbing paint
20. We can use the following tool to take care of our finger and toes.
(a) Blade and nail fill (b) Cutlass and knife
(c) Teeth (d) Sharpner



LAGOS STATE UNIVERSAL BASIC EDUCATION BOARD
3RD TERM UNIFIED EXAMINATION, JULY 2019
PRIMARY FOUR

NAME OF SCHOOL: _____

PUPIL'S NAME: _____

CLASS: PRIMARY FOUR

SUBJECT: BASIC SCIENCE AND TECHNOLOGY (60 Marks)

DURATION: 1½ HOUR

BASIC SCIENCE

INSTRUCTION: Read thoroughly and pick the correct answer within the given alternatives.

1. is the total condition of the atmosphere in a place at a given time.
(a) Wind (b) Weather (c) Cloud (d) Lightening
2. The liquid substance in the thermometer is called
(a) oil (b) water (c) mercury (d) gas
3. Burning of wood is an example of change.
(a) permanent (b) temporary (c) quick (d) slow
4. A mixture of decayed organic matter is
(a) fertilizer (b) plant (c) compost (d) soil
5. Contaminated foods are to the body.
(a) Nutritious (b) good (c) harmful (d) fair
6. The uppermost part of the earth on which plant grows is known as
(a) soil (b) ground (c) floor (d) farm
7. Which of the following shows the direction of the wind?
(a) Thermometer (b) Barometer (c) Rain gauge (d) Wind vane
8. The following are examples of insects except
(a) termite (b) weevil (c) owl (d) bee
9. Permanent changes can also be called
(a) reversible change (b) irreversible change
(c) temporary change (d) none of the above
10. These are harmful substances except
(a) rotten egg (b) stale eba (c) spoilt mango (d) fresh fruit

11. The process where heated water changes to steam or water vapour is
 (a) boiling (b) evaporation (c) steaming (d) filtration
12. is very important for healthy bones and teeth.
 (a) Carbohydrate (b) Calcium (c) Fats and oil (d) Water
13. What is purification of water?
 (a) The process of pouring water in a container
 (b) The process of storing water
 (c) The process of removing dirt from water
 (d) The process of fetching water
14. The food nutrient present in fruits is.....
 (a) vitamin C (b) protein (c) iron (d) carbohydrate
15. The elastic pipe that joins the mouth to the stomach is
 (a) pancreas (b) mouth (c) oesophagus (d) large intestine
16. The following are forms of energy except
 (a) mechanical energy (b) heat energy (c) solar energy (d) plastic energy
17. The instrument used for measuring temperature is
 (a) thermometer (b) rain gauge (c) windvane (d) barometer
18. The energy possessed by moving objects e.g. a ball is
 (a) potential energy (b) kinetic energy (c) nuclear energy (d) sound energy
19. Pesticides are used for killing
 (a) crops (b) birds (c) pests (d) fungi
20. The use of scientific knowledge to design and make products is
 (a) construction (b) technology (c) art (d) learning

AGRICULTURE SCIENCE

INSTRUCTION: Read thoroughly and pick the correct answer within the given alternatives.

1. As a farm tool, the axe is used for
 (a) uprooting trees or stumps (b) clearing grass
 (c) applying liquid fertilizer (d) to trim or cut branches
2. To take care of our farm tools we should do all these things except
 (a) clean and dry tools (b) sharpen when necessary
 (c) apply grease to avoid rusting (d) soak in water for months
3. A tool used for clearing weeds and cutting down trees is
 (a) spade (b) rake (c) cutlass (d) garden fork
4. The plants that are not wanted and grow in between planted crops are called
 (a) flowers (b) cash crops (c) weeds (d) water leaf

5. These are useful effects of weed except
 (a) Feeds for live stock (b) preparation of compost
 (c) controlling soil erosion (d) it serves as home for pests
6. All of these are uses of a wheel barrow except
 (a) carry farm inputs (b) spreading or levelling soil
 (c) carry harvested crops (d) carry seedlings
7. Hook and line are used by
 (a) gardener (b) hunter (c) fisherman (d) none of the above
8. The substances added to the soil to make it produce good crop is
 (a) fertilizer (b) oil (c) vegetables (d) crops
9. Fish can be preserved for as long as a month by
 (a) smoking (b) selling (c) arranging (d) storing
10. Weeds can be controlled by
 (a) adding fertilizer (b) making a fence
 (c) use of chemical (d) watering weed
11. All these are uses of spade except
 (a) carry soil or fertilizer from one place to another (b) dig holes
 (c) level soil (d) cutting down trees
12. is an example of ornamental crop.
 (a) Tomatoes (b) Hibiscus (c) Spinach (d) Okro
13. can be preserved by freezing.
 (a) Yam (b) Oil (c) Fresh tomatoes (d) Amala
14. Erosion and over grazing can lead to loss of
 (a) fertility (b) water (c) weight (d) height
15. Watering can is used for the following except
 (a) wetting crops during dry season (b) applying liquid fertilizer
 (c) putting water (d) sharpening cutlass
16. All of these are types of farming activities except
 (a) fishing (b) rearing of goat (c) crocheting (d) planting of crops



The diagram above is a

- (a) rake (b) garden fork (c) hand trowel (d) shears

18. A doctor who takes care of pets and animals is called
 (a) dentist (b) physician (c) nurse (d) veterinary doctor
19. Which of these is not a bird?
 (a) Duck (b) Turkey (c) Donkey (d) Eagle
20. Bad effect of using chemicals to control pest and diseases on the farm can cause all these except
 (a) food poisoning (b) death of soil organism
 (c) death of plants and animals (d) make plants to grow well

PHYSICAL AND HEALTH EDUCATION

INSTRUCTION: Read thoroughly and pick the correct answer within the given alternatives.

1. Communicable diseases are
 (a) diseases that cannot be easily contacted
 (b) diseases which can easily be passed from one person to another
 (c) diseases in rural areas
 (d) none of the above
2. All of these are air-borne diseases except
 (a) small-pox (b) whooping cough (c) measles (d) malaria
3. There are classes of food nutrient.
 (a) 4 (b) 6 (c) 7 (d) 9
4. is the help given to a sick or injured person before a full medical treatment is available.
 (a) First aid (b) Treatment (c) Last aid (d) Aid box
5. Table tennis is played on a
 (a) board (b) plank (c) tennis board (d) football field
6. There are types of waste disposal.
 (a) 10 (b) 2 (c) 6 (d) 5
7. The ability to live a full and balanced life is.....
 (a) physical structure (b) happiness (c) physical fitness (d) physical shape
8. Exchange of baton is an event in race.
 (a) volley ball (b) relay race (c) high jump (d) football
9. Another name for football is
 (a) net ball (b) volley ball (c) soccer (d) basketball
10. Clean environment make us
 (a) healthy (b) weak (c) sick (d) all of the above
11. are substances in food for body nourishment.
 (a) Nutrition (b) Nutrients (c) Malnutrition (d) Liquids

12. All these are ways of preventing diseases except
 (a) drinking clean water (b) adequate nutrition
 (c) clean environment (d) eating contaminated food
13. and are types of gymnastics.
 (a) Swimming and dancing (b) Dancing and clapping
 (c) Stunts and tumbling (d) Table tennis and hockey
14. We can apply to treat fresh wound or cut.
 (a) iodine (b) sand (c) ink (d) pepper
15. Non-locomotive movement are these except
 (a) running (b) bending (c) twisting (d) stretching
16. Which of these is a track event?
 (a) high jump (b) boxing (c) 400m (d) swimming
17. Cassava, bread and maize are sources of
 (a) protein (b) carbohydrate (c) fats (d) minerals
18. Which of these is not a water borne disease?
 (a) Diarrhoea (b) Cholera (c) Guinea worm (d) Scurvy
19. One of these is not a type of exercise.
 (a) Skipping (b) Jumping (c) Resting (d) Running
20. All of these are safety measures at home except
 (a) keeping harmful objects properly (b) avoid throwing banana peelings on the floor
 (c) keeping drugs away from children (d) playing with electric sockets

COMPUTER STUDIES

INSTRUCTION: Read thoroughly and pick the correct answer within the given alternatives.

1. is used to store data or information for future use.
 (a) Joystick (b) Hard disk (c) Mouse (d) Speaker
2. The monitor is also called
 (a) visual display union (b) visual display universe
 (c) visual display unit (d) visuality display unity
3. The two major types of software are and
 (a) system and application (b) game and music (c) type and draw (d) system and unit
4. The information viewed from the screen of the monitor is called.....
 (a) data (b) soft copy (c) hard copy (d) disk
5. The process of starting and setting a computer system is called
 (a) reset (b) boosting (c) booting (d) power
6. Computer processes data through.....
 (a) central processing unit (b) visual display unit
 (c) central people's unit (d) visual processing unit
7. cable transfers signals from central processing unit to other devices.
 (a) Unit (b) Power (c) Data (d) Processing

8. is the physical component of the computer that we can be seen, felt and touched.
(a) Software (b) People ware (c) Hardware (d) Sock ware
9. The result from a processed data is known as
(a) information (b) hard copy (c) data processing (d) device
10. refers to a set of instruction that direct the activities of the computer system.
(a) Hardware (b) System unit (c) Software (d) Application
11. What is computer?.
(a) Computer is a washing machine
(b) Computer deals with cooking and selling
(c) Computer is an electronic machine that accepts data, process data and gives a meaningful information
(d) Computer is a device.
12. A device that is used to print out information on a computer is called
(a) telescope (b) ruler (c) speedometer (d) printer
13. Alpha-numeric means
(a) letters (b) letters and numbers (c) numbers (d) none of the above
14. key is used to erase the character preceding the cursor.
(a) Space bar (b) Enter (c) Backspace (d) Capslock
15. ROM means
(a) Read One Memory (b) Read On Memo
(c) Random Access Memory (d) Read Only Memory
16. Which one out of these is a pointing device?
(a) Monitor (b) Mouse (c) Disk (d) Scanner
17. The part of a computer that looks like a television is known as
(a) Monitor (b) Mouse (c) Speaker (d) CPU
18. A mouse can work effectively when placed on
(a) palm (b) seat (c) lap (d) mouse pad
19. is a set of instructions, given to computer to make it function.
(a) Hardware (b) Software (c) People ware (d) Home ware
20. Warm booting and are the two major ways of booting the computer.
(a) heat booting (b) cool booting (c) cold booting (d) light booting

HOME ECONOMICS

INSTRUCTION: Read thoroughly and pick the correct answer within the given alternatives.

1. Stitches are divided into two categories namely and
(a) over casting and back stitch (b) temporary and permanent stitches
(c) long and short stitches (d) blanket and hemming stitches
2. All these are examples of personal belongings except
(a) toothbrush (b) hair brush (c) singlet (d) curtain

3. is an example of a permanent stitch.
(a) Tacking (b) Back stitch (c) Tailor's tacking (d) Long and short stitch
4. A room where we keep our foodstuffs is called
(a) nursery (b) bedroom (c) store or pantry (d) sitting room
5. is not a factor that can determine choice of personal belongings.
(a) Money (b) Age (c) Size (d) Friends
6. Grains and tubers are good sources of
(a) protein (b) vitamins (c) carbohydrate (d) fats and oil
7. Liquid extracts from fruit is known as
(a) fruit drink (b) water (c) liquid (d) fruit juice
8. An example of a local snack is
(a) cheese balls (b) biscuit (c) kuli-kuli (d) meat pie
9. Needle craft includes sewing, knitting and
(a) laundry (b) crocheting (c) folding (d) weaving
10. is an example of a decorative stitch.
(a) Hemming (b) Tacking (c) Open seam (d) Herringbone
11. The method of joining two or more pieces of materials together firmly is called
(a) twisting (b) seam (c) crocheting (d) binding
12. Light food eaten between meals is called
(a) lunch (b) breakfast (c) dinner (d) snacks
13. All these are types of seam except
(a) open seam (b) run and fell (c) French seam (d) chain stitch
14. Another name for body building food is
(a) minerals (b) vitamins (c) protein (d) water
15. is used for taking body measurement and measure material.
(a) Tape rule (b) Thimble (c) Tracing wheel (d) Tailor's chalk
16. The following are functions of nutrients except one.
(a) They help to supply energy for activities (b) They help us to develop and grow
(c) They protect our bodies from diseases (d) They make the body weak
17. All of these can be found in the kitchen except
(a) kerosene stove (b) gas cooker (c) refrigerator (d) pillow
18. Hand sewing machine, threadle machine and are types of machine.
(a) electric (b) fuel (c) gas (d) generator
19. Palm oil, butter, margarine, are sources of
(a) fat (b) iron (c) water (d) protein
20. is an example of disinfectant.
(a) Kerosene (b) Dettol (c) Soap (d) Oil



LAGOS STATE UNIVERSAL BASIC EDUCATION BOARD
3RD TERM UNIFIED EXAMINATION, JULY 2019
PRIMARY FIVE

NAME OF SCHOOL: _____

PUPIL'S NAME: _____

CLASS: PRIMARY FIVE

SUBJECT: BASIC SCIENCE AND TECHNOLOGY (60 Marks)

DURATION: 1½ HOUR

BASIC SCIENCE

INSTRUCTION: Read thoroughly and pick the correct answer within the given alternatives.

1. Which of the following is known as the frame work of the human body?
(a) Skeletal system (b) Muscle (c) Bone (d) Head
2. helps to hold the tree firmly in the ground.
(a) Leaves (b) Roots (c) Branch (d) Flower
3. Which of these is not an example of ruminant animals?
(a) Fish (b) Cattle (c) Goat (d) Birds
4. The boiling point of water is
(a) 150°C (b) 120°C (c) 100°C (d) 110°C
5. One of these is not a drawing instrument.
(a) Ruler (b) Shoe (c) Pencil (d) Paper
6. An example of carnivore animals is
(a) Dog (b) Rabbit (c) Cattle (d) Fish
7. Electrical energy can be converted to
(a) motor energy (b) heat energy (c) bicycle energy (d) wood energy
8. One of these is not the function of bones and joints in the body.
(a) It protects delicate bone (b) It assists in the production of blood
(c) It protects the body against disease (d) All of the above
9. is the act of keeping something in good condition.
(a) Maintenance (b) Damage (c) Destruction (d) Stop
10. A change in the body or mind which is the sign of a disease is known as
(a) happiness (b) symptoms (c) illness (d) sick

11. Heat is used for the following except.....
 (a) drying of clothes (b) cooking food
 (c) building human being (d) produce fire
12. A..... is a chemical pack that can store or give out electric current.
 (a) book (b) cell (c) bread (d) scale
13. All these are types of rock except
 (a) igneous rock (b) sedimentary rock (c) metamorphic rock (d) dust rock
14. Drawing is the combination of straight and curved line to produce of an object.
 (a) image (b) light (c) shape (d) shadow
15. can convert electrical energy to heat energy.
 (a) Stove and gas (b) Fridge and television
 (c) Electric cooker (d) Standing fan and ceiling fan
16. Objects that allow electricity to pass through them are called
 (a) conductors (b) plastic (c) solar (d) glass
17. Which of these instrument is used to read the hotness and coldness of a body?
 (a) Rain gauge (b) Windvane (c) Tape measure (d) Thermometer
18. Poor quality environment can attract
 (a) snail (b) butterfly (c) fresh air (d) snake
19. Which of these is an example of rock in Nigeria?
 (a) Idanre hill (b) Olumo rock (c) Lake chad (d) Osun rock
20. Long bones are found in the
 (a) finger (b) mouth (c) toes (d) thigh

PHYSICAL AND HEALTH EDUCATION

INSTRUCTION: Read thoroughly and pick the correct answer within the given alternatives.

1. The movement of arms and legs to push against the water and move forward is called
 (a) swimming strokes (c) front strokes
 (b) swimmer (d) back strokes
2. is a harmful effect of alcohol.
 (a) Stomach ulcer (b) Dysentery (c) Headache (d) Sleeping sickness
3. All these are outdoor activities except
 (a) working in groups (b) ludo
 (c) sharing responsibilities (d) working in groups
4. School health program helps in promoting.
 (a) Good health (b) Sickness (c) Uncleanliness (d) Laziness
5. Hockey is a game played on the field by
 (a) two of twenty players (b) two teams of eleven
 (c) five team of thirty players (d) seven team of twenty players

6. The skills in high jump include run up, take-off, flight and
 (a) rend (b) recovery (c) recover (d) remain
7. Doctor that treats teeth problem is called a
 (a) lawyer (b) surgeon (c) dentist (d) teacher
8. What is communicable disease?
 (a) Disease caused by contact (b) Disease caused by taking poor diet
 (c) Disease caused by drinking bad water (d) Disease of the lungs
9. An official who directs the affairs of football match is
 (a) coach (b) footballer (c) referee (d) empire
10. The total number of a football team is
 (a) 11 (b) 32 (c) 40 (d) 10
11. Brushing your teeth and tongue daily helps to prevent
 (a) mouth odour (b) body odour (c) eye odour (d) nose odour
12. One of the agents of insects borne disease is
 (a) grasshopper (b) termite (c) earthworm (d) housefly
13. Physical education is the development of the through physical fitness.
 (a) class (b) body (c) blood (d) ball
14. Basketball is played in the
 (a) court (b) field (c) table (d) stick
15. One of the importance of school health programme is to
 (a) promote and maintain health status of the pupils in our school
 (b) promote fighting among pupils
 (c) promote stealing in the school
 (d) making the pupils to come to school late
16. Common water borne diseases is
 (a) cholera (b) measles (c) chicken pox (d) all of the above
17. The following are indoor games except
 (a) table tennis (b) ludo (c) high jump (d) long jump
18. An example of gymnastic activity with apparatus is
 (a) swinging (b) running (c) backward (d) somersault
19. All these are activities in gymnastics except
 (a) forward roll (b) cart wheel (c) arab spring (d) dancing
20. Which of these bodies is in charge of drugs?
 (a) LAMATA (b) NDLEA (c) MTA (d) LAWMA

COMPUTER STUDIES

INSTRUCTION: Read thoroughly and pick the correct answer within the given alternatives.

1. Recycle bin is a place where are kept in a computer.
(a) rejected words (b) computer words
(c) deleted files or folders (d) internet
2. w.w.w. means
(a) World wide web (b) world web wide
(c) web wide world (d) world wife web
3. is the area on the screen where icons are displayed after booting the computer.
(a) Wallpaper (b) Central processing unit
(c) Desktop (d) Speaker
4. One of these is not an importance of computer games.
(a) Entertainment (b) Dancing (c) Educational (d) Recreational
5. device is used to enter data into the computer.
(a) Input (b) Output (c) Keyboard (d) Hardware
6. Analogue, digital and are classes of computer.
(a) hybrid (b) mini (c) micro (d) macro
7. Mini computer is the of all classes of computer.
(a) smallest (b) medium (c) biggest (d) largest
8. Which part of computer system is called the heart and the brain of computer?
(a) Speaker (b) Monitor (c) Mouse (d) Central processing unit
9. Example of an input device is
(a) laptop (b) computer (c) mouse (d) radio
10. Classification of computer by purpose areand
(a) special and general (b) size and speed
(c) user and operation (d) analogue and digital
11. How many classes of computer by type do we have?
(a) 4 (b) 3 (c) 2 (d) 7
12. An electronic machine that accepts, stores, process, retrieve data and gives out information is known as
(a) desktop (b) monitor (c) phone (d) computer
13. The name of the devices used for playing computer game are keyboard, mouse and
(a) scrabble (b) joystick (c) chess (d) drum set
14. The pictures found on a computer desktop is called
(a) pictures (b) cursor (c) icons (d) drawings
15. is used to create a new paragraph.
(a) Tool bar (b) Enter key (c) Function key (d) Title bar

16. The fastest type of computer by size is
 (a) micro computer (b) mini computer
 (c) mainframe computer (d) super computer
17. The full meaning of e-mail is
 (a) electronic mail (b) electric male
 (c) electronic male (d) electric mail
18. All these are storage devices except
 (a) hard disk (b) keyboard (c) compact disk (d) flash drive
19. There are computer generation.
 (a) 7 (b) 6 (c) 3 (d) 5
20. The result produced by the processing of data is called
 (a) meaningful (b) output (c) device (d) input

HOME ECONOMICS

INSTRUCTION: Read thoroughly and pick the correct answer within the given alternatives.

1. Home made polish are used for polishing and at home.
 (a) plastic chair (b) iron rod sheet (c) wooden chairs/tables (d) carpet and rugs
2. All these are articles used for making simple clothing articles except
 (a) pins (b) scissors (c) cup (d) hand needles
3. One of these is a way of caring and maintaining of clothing.
 (a) washing our clothes with palm oil (b) mend your clothes as soon as they are turn
 (c) cutting your clothes with scissor (d) store clothes in gutter
4. Our clothes can be store in one of these objects except
 (a) bag (b) wardrobe (c) cupboard (d) refuse bin
5. Which of these food items can be prepared by using boiling method?
 (a) Beans cake (b) Roasted maize (c) Rice and yam (d) Akara
6. Best method of cooking moi-moi is
 (a) roasting method (b) frying method (c) baking method (d) steaming method
7. Which of these is used to make soap?
 (a) Palm oil (b) Kerosene (c) Petrol (d) Engine oil
8. One of the method of cooking is
 (a) watering (b) jumping (c) frying (d) sleeping
9. All these are types of surface in the home except
 (a) mud surface (b) cement surface (c) wooden surface (d) plastic surface
10. Egg shell powder is an example of
 (a) local cleaning agent (b) cleaning ware (c) polish (d) soap

11. An instrument for protecting the middle finger when sewing is called
 (a) thumble (b) scissors (c) thread (d) needle
12. One of the importance of the kitchen-hygiene is
 (a) to pour water on the floor (b) to open window
 (c) to spread mosquito net (d) to keep the kitchen tidy
13. The two types of frying are and
 (a) deep and shallow frying (b) bend and straight frying
 (c) high and low frying (d) long and slow frying
14. Aprons are worn when cooking to prevent our clothes from being
 (a) stained (b) cleaned (c) to look different (d) bleached
15. These are modern day floor finishing except
 (a) files floor (b) mud floor (c) terrazzo floor (d) concrete floor
16. is good for washing the back of pot and cooking utensils at home.
 (a) Candle wax (b) Shell powder (c) Chalk (d) Palm oil
17. Household pest include the following except one.
 (a) Mosquitoes (b) Bedbugs (c) Cat (d) Ant
18. The clothes used in kitchen when cooking is called
 (a) dinning clothes (b) table cloth (c) ankara clothes (d) apron
19. method is used for preparing moi-moi.
 (a) Roasting method (b) Frying method
 (c) Baking method (d) Steaming method
20. are harmful insects and rodent that are dangerous to health and causes sickness.
 (a) Household pest (b) Household pets
 (c) Household people (d) All of the above

AGRICULTURAL SCIENCE

INSTRUCTION: Read thoroughly and pick the correct answer within the given alternatives.

1. Which of these is a livestock?
 (a) Cassava (b) Stone (c) Pig (d) Weevil
2. The artificial way of providing water for plant is known as
 (a) bookkeeping (b) irrigation (c) self help (d) poultry
3. The disease that affect tomatoes is
 (a) tomato rat (b) tomato rot (c) cassava mosaic (d) tomato weevil
4. Application of fertilizer to the soil improve the yield of
 (a) cloth (b) water (c) animal (d) crop

5. All these are common pests except one.
 (a) rats (b) snake (c) beetles (d) caterpillars
6. Pests can be controlled with this measure.
 (a) Use of chemical agent or drug (b) Sleeping in the farm
 (c) Weeding the crops (d) touching the plant regularly
7. A plant that has a seed with one cotyledon is called
 (a) monocot (b) dicot (c) crop (d) tricot
8. Pre-planting activities on the farm called
 (a) after processing (b) before planting (c) after prayer (d) after planting
9. All these are specific needs of young animals for health growth except
 (a) clean water (b) clearing (c) adequate medication (d) poisonous food
10. Another name for livestock production is.....
 (a) medication (b) livestock rearing (c) tailoring (d) animal husbandry
11. An example of animal that eats grass is called
 (a) goat (b) hen (c) snail (d) pig
12. One of the best way of controlling insects on the farm is called
 (a) burning (b) cutting (c) insecticide (d) herbicide
13. Ruminant animals have stomach.
 (a) simple (b) complex (c) double (d) single
14. What is the general name for farm animals?
 (a) Livestock (b) Animal (c) Cattle (d) Fowl
15. Animal that produce milk and meat for human consumption is
 (a) horse (b) cow (c) pig (d) goat
16. All these are ruminant animals except
 (a) goat (b) hen (c) sheep (d) cow
17. drugs are used for animals to prevent diseases caused by special germs.
 (a) Malaria (b) Typhoid (c) Vaccines (d) Vitamin
18. All these are qualities of a good livestock except
 (a) eat slowly (b) grow fast (c) healthy (d) not easily
19. Clean environment for the animals reduces the risk of
 (a) food (b) product (c) disease (d) weight
20. All these animals are non-ruminants except one.
 (a) Rabbit (b) Dog (c) Hen (d) Goat



LSUBEB/019/07/06

LAGOS STATE UNIVERSAL BASIC EDUCATION BOARD
3RD TERM UNIFIED EXAMINATION, JULY 2019
PRIMARY SIX

NAME OF SCHOOL: _____

PUPIL'S NAME: _____

CLASS: PRIMARY SIX

SUBJECT: BASIC SCIENCE AND TECHNOLOGY (60 Marks)

DURATION: 1 ½ HOUR

BASIC SCIENCE

INSTRUCTION: Read thoroughly and pick the correct answer within the given alternatives.

1. Movement occurs whenis applied on an object.
(a) force (b) hand (c) stone (d) body
2. The use of drug in a way that is harmful to the body is called
(a) hard drugs (b) illegal drugs (c) drug abuse (d) single drug
3. The female parts of the flower is called
(a) anther (b) pollen grains (c) stem (d) stigma
4. Body movement is made possible by system.
(a) reproductive (b) muscular (c) circulatory (d) respiratory
5. The smallest unit of life is called
(a) nucleus (b) tissue (c) cell (d) organ
6. Another name for white blood cell is known as
(a) plasma (b) leucocyte (c) cell (d) thrombocyte
7. The three most important part of a lever are the fulcrum, the load and
(a) force (b) stone (c) support (d) effort
8. Friction can be reduced by applying
(a) oil (b) sand (c) water (d) lemon
9. Rules and regulations put in place to prevent accident or injuries are called
(a) maintenance (b) safety precautions (c) shock (d) information
10. Air has weight, exerts pressure and space.
(a) occupies (b) balance (c) draw (d) support
11. Predictive, preventive and are the three types of maintenance.
(a) exclusive (b) maintenance (c) corrective (d) possessive

12. and are categories of drugs.
 (a) Natural and synthetic (b) Natural and artificial
 (c) Paracetamol and panadol (d) Herbs and synthetic
13. Natural gas can be used for
 (a) making petrol & kerosene (b) heating or cooking
 (c) ornaments & cables (d) making foils & containers
14. The human circulatory system is made up of a tube known as
 (a) blood vessels (b) veins (c) heart (d) capillaries
15. The force that propels something through air is called
 (a) trust (b) thorough (c) taught (d) thrust
16. The scientist who study the weather condition of a place is known as
 (a) meteorologist (b) weather-scientist (c) dentist (d) biologist
17. and are the insects that makes insect pollination occur.
 (a) Carva and pupa (b) Maggot and cockroach
 (c) Bees and butterflies (d) Snail and earthworm
18. One of these is an example of an acid.
 (a) Sodium chloride (b) Potassium hydrochloride
 (c) Sodium chloride (d) Hydrochloric acid
19. The waste water carried through underground tunnel from the house is known as
 (a) refuse (b) waste (c) sewage (d) dirty
20. Poor quality environment can attract which of the following?
 (a) snail (b) butterfly (c) fresh air (d) snake

AGRICULTURAL SCIENCE

INSTRUCTION: Read thoroughly and pick the correct answer within the given alternatives.

1. The following are agents of soil formation except
 (a) animals (b) plants (c) machine (d) man
2. The disintegration of rocks to form soil is called
 (a) weathering (b) pollution (c) fertilization (d) rock
3. Rain helps in process of soil formation.
 (a) True (b) Not true (c) False (d) None of the above
4. Factors of production does not include
 (a) labour (b) land (c) ghost (d) soil
5. All these are contained in soil except
 (a) water (b) nutrient (c) animal (d) blood
6. Irrigation is the way of providing water for crops.
 (a) private (b) man (c) artificial (d) natural

7. People who engage in agriculture are the following except
(a) animal rearer (b) labourer (c) crop farmer (d) fisherman
8. is an example of tuber crops.
(a) Millet (b) Rice (c) Yam (d) Bread
9. Hide and skin are obtained from
(a) plants (b) farms (c) animals (d) leather
10. Which of the following agricultural produce contains protein in high quality?
(a) Maize (b) Millet (c) Palm oil (d) Beans
11. The following are names of male adult livestock except
(a) cock (b) ewe (c) fox (d) bull
12. One of these are the problems facing agriculture in West Africa.
(a) Too much spending of food (b) inadequate storage facilities
(c) lack of oxygen (d) lack of understanding
13. The use of waste materials to make useful products is known as
(a) Renewal (b) Recycling (c) Reproduction (d) Replacement
14. The bird flu that occurred in Nigeria sometimes ago affected
(a) fish farmers (b) food crop farmer (c) goat rearer (d) poultry farmers
15. The covering of beds with dry grasses is known as
(a) clearing (b) hunting (c) mulching (d) weeding
16. Mechanized farming required the use of for farming.
(a) cutlass (b) tractor (c) spade (d) axes
17. A building where milk is being processed is called
(a) bakery (b) refinery (c) warehouse (d) dairy
18. Uses of is the best way of controlling insect on the farmland.
(a) herbicides (b) burning (c) cutting (d) insecticide
19. Which of the following is not agricultural activity?
(a) cultivating of land (b) planting of crops
(c) making ridges (d) welding of steel
20. A place specially made for keeping and rearing fishes is called
(a) water bottle (b) fish pond (c) fish ways (d) fish case

PHYSICAL AND HEALTH EDUCATION

INSTRUCTION: Read thoroughly and pick the correct answer within the given alternatives.

1. Physical education is the development of the through physical activities.
(a) class (b) body (c) blood (d) ball
2. An improper care of the human teeth can cause
(a) teething (b) growth (c) tooth decay (d) death

3. The pumps blood in the human body.
(a) vein (b) heart (c) arteries (d) capillaries
4. The tells us everything about our body.
(a) brain (b) skull (c) legs (d) hands
5. What is the shape of a football pitch?
(a) Triangle (b) Rectangle (c) Square (d) Circle
6. is used for playing hockey.
(a) Racket (b) Table tennis bat (c) Hockey stick (d) Rolling stick
7. Which of these is not a long jump rules and regulations?
(a) We should not miss the stepping base (b) We should not land or step backward
(c) We should not fall back on the buttocks (d) We should land on our knees
8. For proper functioning of the heart and other organs in the body we need
(a) drink energy juice (b) eats too much of carbohydrate
(c) exercise the body (d) stay at home and rest
9. Social health brings about our relationship with
(a) other people (b) forcing people (c) beating people (d) unseen people
10. One of the skills in long jump is
(a) singing styles (b) dancing styles
(c) landing styles (d) dribbling styles
11. Volleyball match is conducted by the following except
(a) the first referee (b) the second referee (c) one referee (d) ten linesmen
12. system deals with elimination of waste materials in the body.
(a) Nervous (b) Digestion (c) Muscular (d) Excretory
13. The most popular and common event of athlete are and
(a) track and field (b) long and short (c) field and marathon (d) track and board
14. The following are indoor games except
(a) table tennis (b) scrabble (c) high jump (d) ludo
15. The movement of arms and legs to push against the water and move forward is known as
(a) swimmer strokes (b) swimming strokes (c) dog paddles (d) front and back
16. Sport involving difficult physical exercise to improve performing skill is
(a) volley ball (b) basketball (c) gymnastic (d) football
17. The ultimate consequences of drug abuse is
(a) good health (b) death and loss of memory
(c) sound mind (d) improves ability
18. is an illness of the body tissues which is caused by lack of Vitamin C.
(a) Chicken pox (b) Measles (c) Beriberi (d) Scurvy

19. A deadly transmitted disease is known as
 (a) headache (b) Toothache (c) Guinea worm (d) HIV/AIDS
20. Which of these is not an advantage of disposing waste?
 (a) To prevent flies (b) To keep our environment clean
 (c) To allow rats into the homes (d) To prevent diseases

HOME ECONOMICS

INSTRUCTION: Read thoroughly and pick the correct answer within the given alternatives.

- Insufficient intake of can cause poor development.
 (a) fat (b) vitamin (c) protein (d) mineral
- Foods are classified into group.
 (a) ten (b) four (c) three (d) four
- One of these is not a good method of preservation of food.
 (a) watering (b) canning (c) smoking (d) drying
- The arrangement made to feed the family adequately is
 (a) adequate food (b) meal planning (c) expenditure (d) irregular planning
- is used in measuring both the body and the fabric.
 (a) Scissors (b) Thread (c) Tailors chalk (d) Tape measure
- Home economics is the study of the following except
 (a) laundry (b) food and nutrition (c) fishing (d) clothing and textile
- A person that oversees and prescribes the right nutrition is known as
 (a) diet food (b) balanced nutrition (c) balanced diet (d) dietician
- One of these is not basis material for making soap.
 (a) Caustic soda (b) Kaolin (c) Kerosene (d) Oil
- is the commonest chemical used to preserve food.
 (a) Salt (b) Sand (c) Stock (d) Bag
- Stain could be removed from our clothes in the following ways except
 (a) bleaching (b) soaking (c) oiling (d) washing
- Mending kit contains all these items except
 (a) scissors (b) thread (c) needle (d) spoon
- Our food should be properly preserved to avoid
 (a) contamination (b) visitors (c) contact (d) money
- quality wood is needed for floor finishing.
 (a) Poor (b) Good (c) Inferior (d) Worn out

14. Household refuse should be disposed
 (a) anyhow (b) promptly (c) properly (d) somewhere
15. and are stitches in home economics.
 (a) Running and back stitches (b) Blanket and front stitches
 (c) Herringbone and over head stitches (d) French and open seam
16. The food nutrient present in fruits is
 (a) calcium (b) vitamins (c) starch (d) water
17. Energy lost during running and hard work can be regained through
 (a) dancing (b) jumping (c) resting (d) reading
18. prevents food from spoilage.
 (a) Storage (b) Freezing (c) Income (d) Bonus
19. One of the ways to ensure cleanliness and safety in the kitchen is to always use your.....
 (a) hygiene (b) equipment (c) line (d) apron
20. Needle and thread are essential tools for
 (a) knitting (b) cooking (c) sewing (d) weaving

COMPUTER STUDIES

INSTRUCTION: Read thoroughly and pick the correct answer within the given alternatives.

1. A connecting of two or more computers to each other is known as
 (a) browsing (b) network (c) linkage (d) joining
2. The full meaning of P.C in computer world is
 (a) public computer (b) public corporation
 (c) personal corporation (d) personal computer
3. Computer needs one of these for prevention of being damage.
 (a) UPS (b) Knife (c) CPU (d) Oil
4. key is used to erase the character preceding the cursor.
 (a) Enter (b) Space bar (c) Backspace (d) Capslock
5. LAN and WAN are computer
 (a) internet (b) network (c) net (d) networking
6. There are types of computer system.
 (a) 3 (b) 6 (c) 4 (d) 5
7. The mouse is an device.
 (a) output (b) point (c) precessing (d) input
8. The part of a computer system that cannot be seen and touched is called.....
 (a) hardware (b) microware (c) software (d) thick ware

9. is the part of a computer system that can be seen, felt and touched.
(a) Software (b) Hardware (c) People ware (d) Child ware
10. One can play on a computer.
(a) game (b) monitor (c) ludo (d) ball
11. The key that cancels any unwanted command or window is called
(a) capslock (b) page up (c) escape key (d) delete key
12. There are so many computer drawing packages but one of the following is recognised.
(a) Drawing book (b) MS-excel (c) Corel draw (d) Mouse
13. A machine that is used to print out information on a computer is
(a) thermometer (b) ruler (c) printer (d) telescope
14. WAN is an acronym used for
(a) Land Access Network (b) Local Area Network
(c) Wide Access Network (d) Wide Area Network
15. In microsoft word tools bar 'U' stand for
(a) underline (b) undergo (c) undo (d) under
16. Which of the following is not true about computer?
(a) It is electronic in nature (b) It cannot process data
(c) It accepts data (d) It stores data
17. The biggest size of computer is
(a) mini computer (b) mainframe computer
(c) super computer (d) micro computer
18. In microsoft word tool bar 'B' stands for
(a) bold (b) black (c) back (d) bee
19. An example of general purpose computer is
(a) mini computer (b) mainframe computer
(c) laptop computer (d) palm top computer
20. All these are computer topology except
(a) Star network (b) car network (c) ring network (d) bus network